

Fracciones



$$\frac{2}{3}$$



—



—



—



—

edufichas.com



—



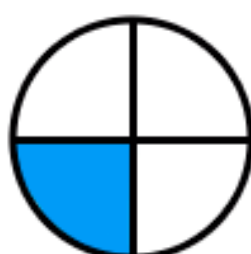
—



—



—



—



—



—

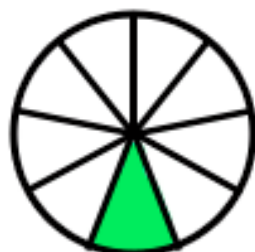
Fracciones



$\frac{1}{5}$



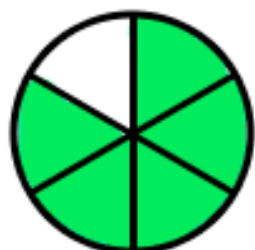
—



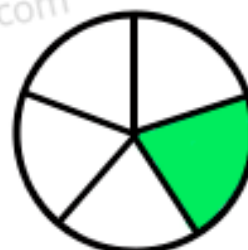
—



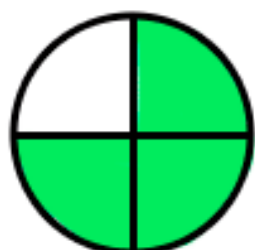
—



—



—



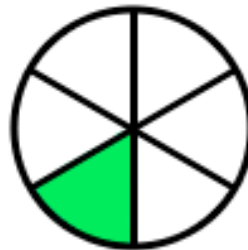
—



—



—



—



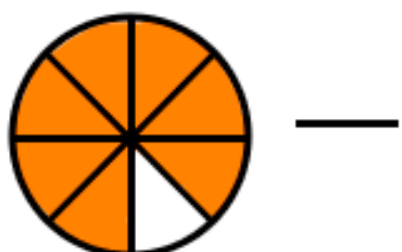

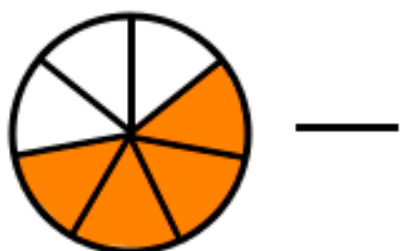
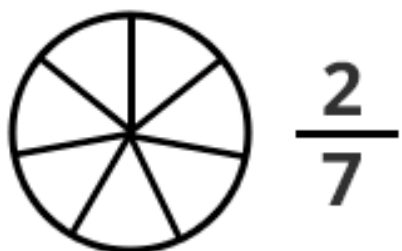
—



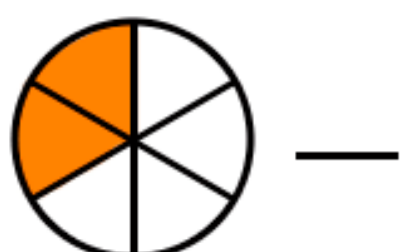
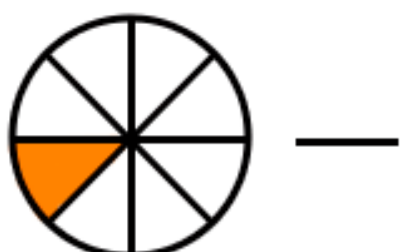
—

edufichas.com


Fracciones



edufichas.com



Fracciones



$\frac{6}{9}$



—



—



—



—



—



—



—



—



—



—



—

edufichas.com